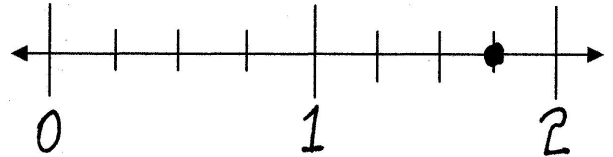
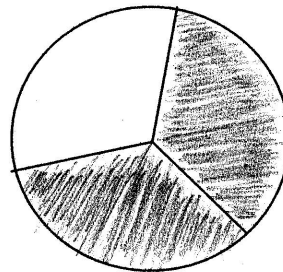


Identify the proper fraction (PF), the improper fraction (IF), or the mixed number (MN). Then match the left column with the appropriate graph and or number line in the right column. All items have at least one match, some have two matches.

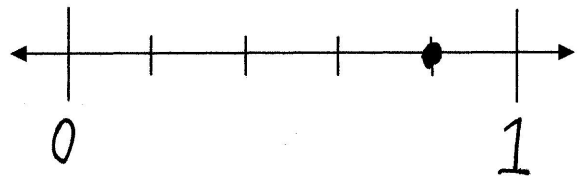
\_\_\_\_\_  $\frac{4}{5}$



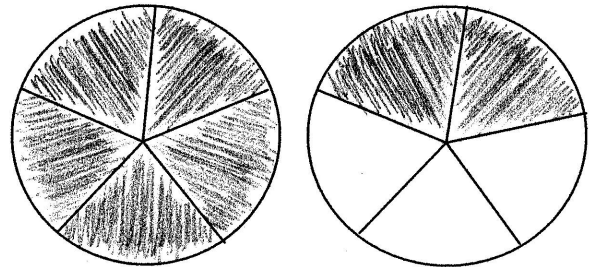
\_\_\_\_\_  $1\frac{3}{4}$



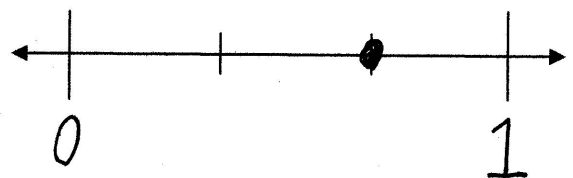
\_\_\_\_\_  $\frac{7}{5}$



\_\_\_\_\_  $\frac{2}{3}$



\_\_\_\_\_  $\frac{7}{4}$



\_\_\_\_\_  $1\frac{2}{5}$